

## Áreas de figuras planas (Cuadrado y rectángulo)

### Calcula

❖ Calcula el área de las siguientes figuras planas:



5 m

9 Hm




3 Hm

9 cm



12 cm



1,5 dm




13 Km




17 Dam

9 Dam



7,2 cm

14 cm



38 Hm