
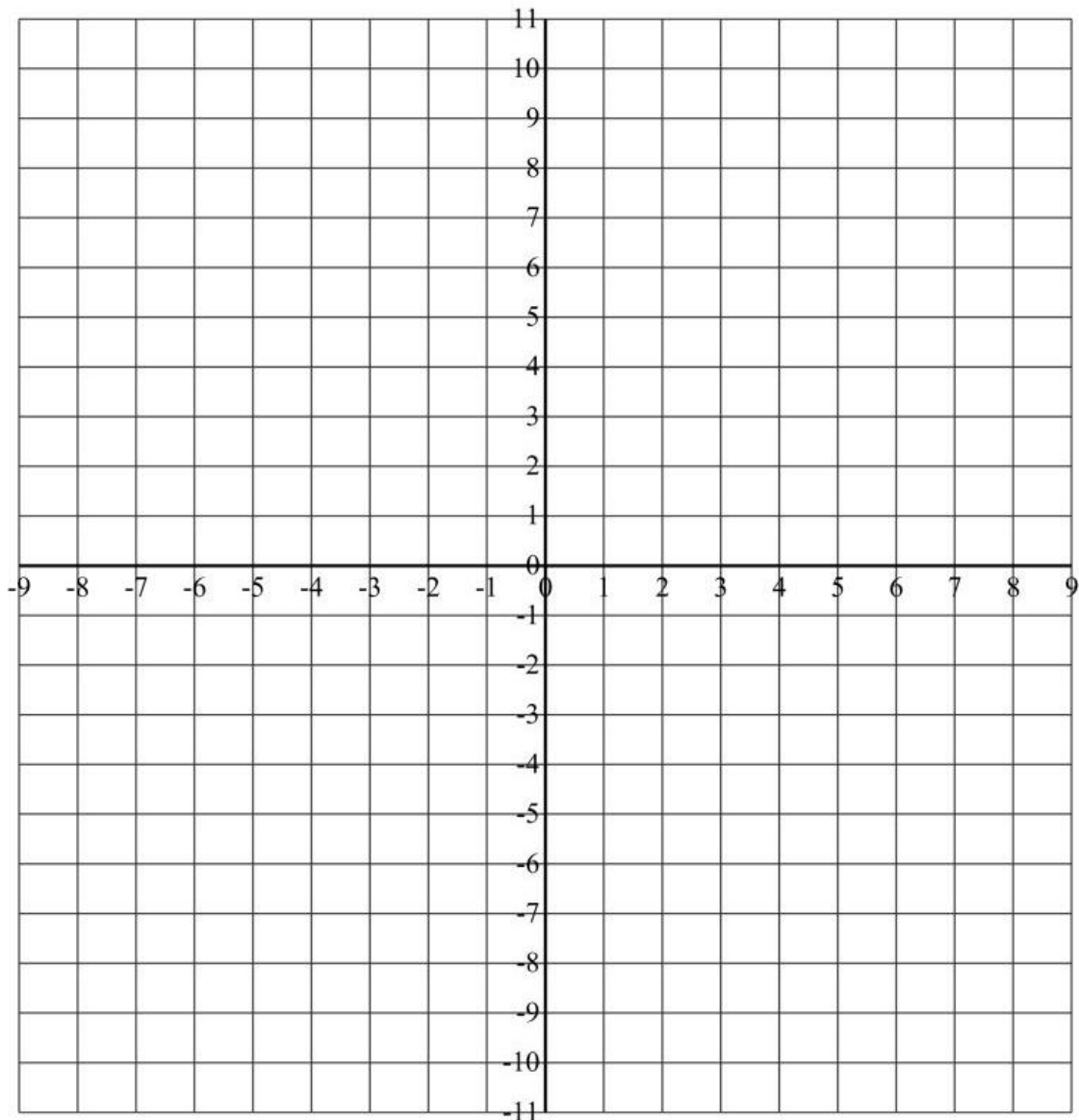


SITUAR COORDENADAS


♣ Sitúa en el plano cartesiano las siguientes coordenadas:



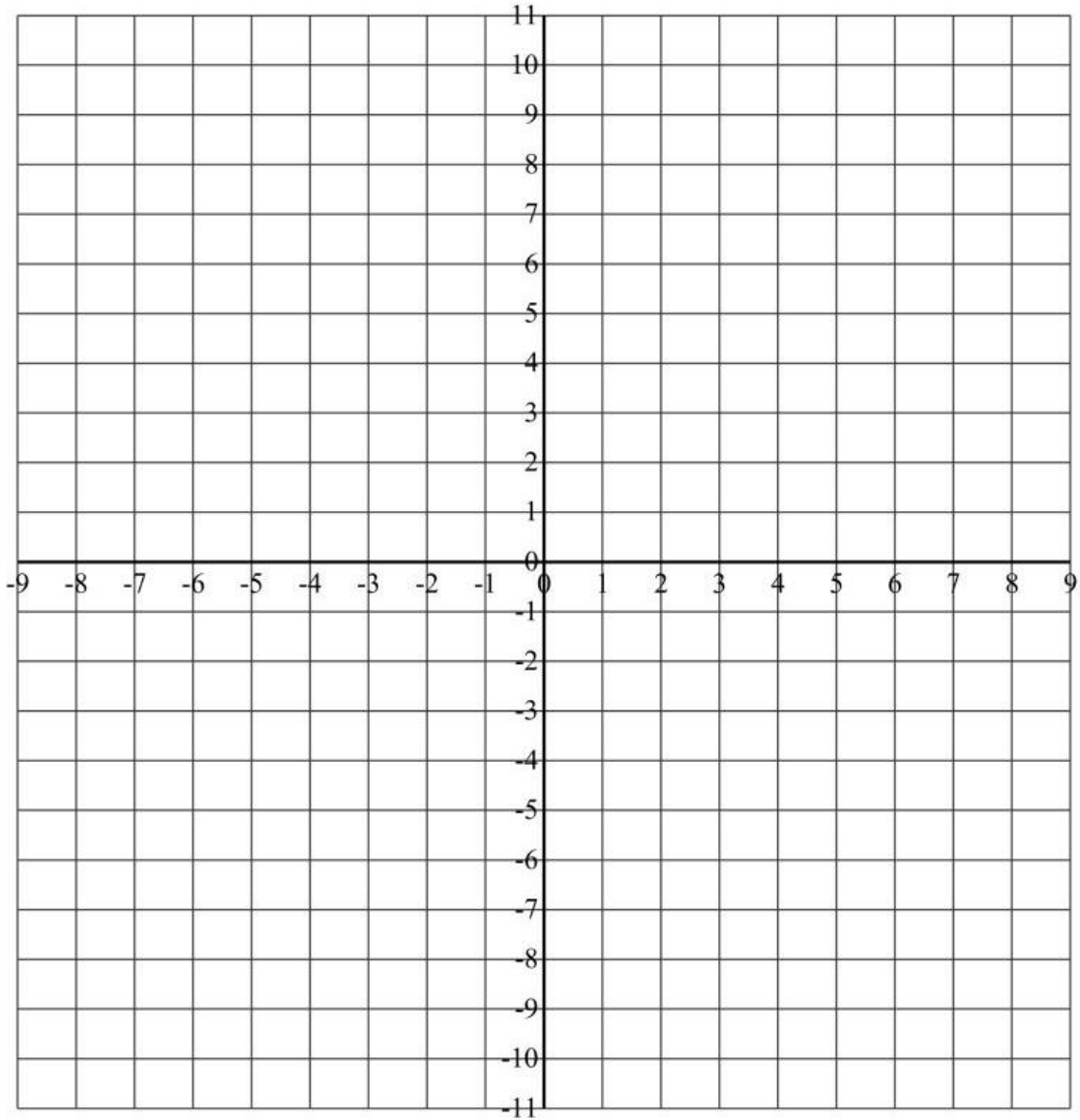
(-6, -1) (1, 7) (5, 0) (3, 6) (-7, 0) (-3, 10) (8, -1) (-8, -6)
(2, -7) (-4, -9) (2, -2) (6, 10) (6, -3) (-5, 5) (-5, -7) (3, -9)




♣ Sitúa en el plano cartesiano las siguientes coordenadas:



$(-6, -9)$ $(6, -7)$ $(8, 6)$ $(5, -8)$ $(1, -7)$ $(2, 0)$ $(-4, -3)$ $(6, -4)$
 $(7, 3)$ $(-6, 7)$ $(6, 1)$ $(-1, 8)$ $(-3, -3)$ $(-6, -10)$ $(-4, 0)$ $(0, 6)$



♠ Sitúa en el plano cartesiano las siguientes coordenadas:



$(-4, 1)$ $(4, -6)$ $(4, 9)$ $(4, -4)$ $(-4, 6)$ $(1, -7)$ $(2, 5)$ $(-7, -3)$
 $(-6, 0)$ $(2, 4)$ $(7, -9)$ $(1, -5)$ $(5, 7)$ $(-2, -4)$ $(0, -8)$ $(-6, -2)$

