

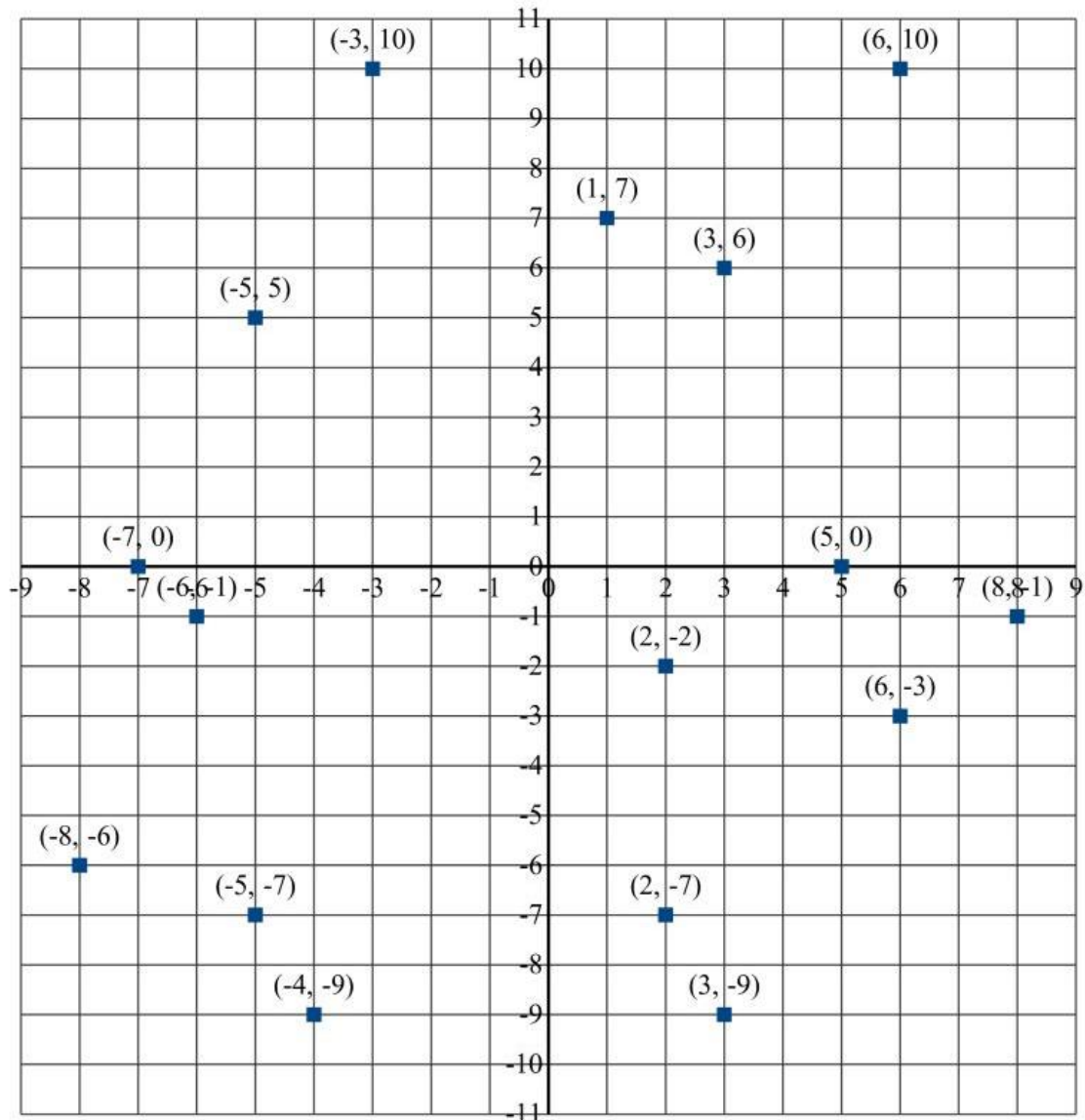
SITUAR COORDENADAS

SOLUCIÓN:


♣ Sitúa en el plano cartesiano las siguientes coordenadas:



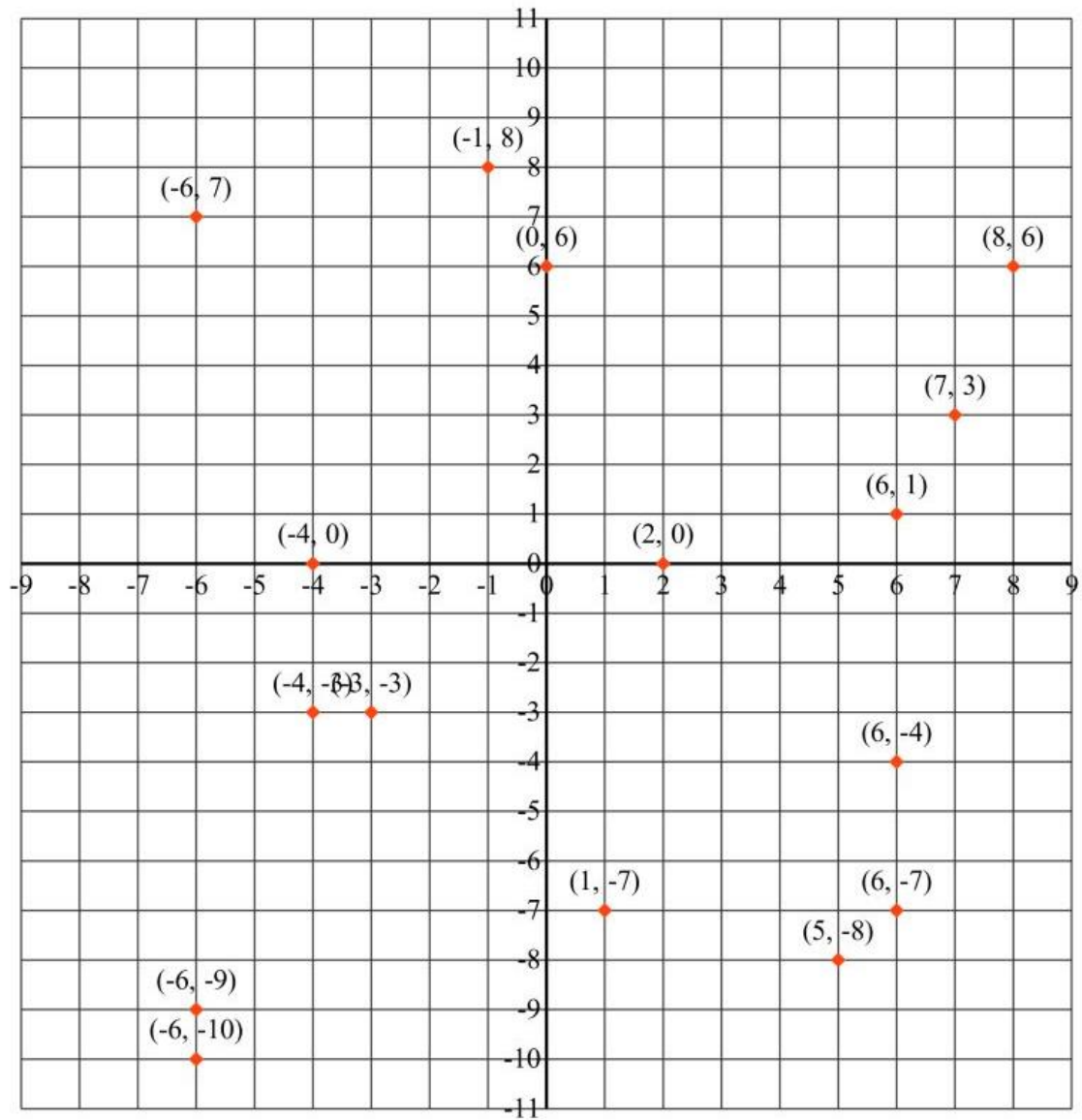
(-6, -1) (1, 7) (5, 0) (3, 6) (-7, 0) (-3, 10) (8, -1) (-8, -6)
(2, -7) (-4, -9) (2, -2) (6, 10) (6, -3) (-5, 5) (-5, -7) (3, -9)




♣ Sitúa en el plano cartesiano las siguientes coordenadas:



(-6, -9) (6, -7) (8, 6) (5, -8) (1, -7) (2, 0) (-4, -3) (6, -4)
(7, 3) (-6, 7) (6, 1) (-1, 8) (-3, -3) (-6, -10) (-4, 0) (0, 6)



♣ Sitúa en el plano cartesiano las siguientes coordenadas:



$(-4, 1)$ $(4, -6)$ $(4, 9)$ $(4, -4)$ $(-4, 6)$ $(1, -7)$ $(2, 5)$ $(-7, -3)$
 $(-6, 0)$ $(2, 4)$ $(7, -9)$ $(1, -5)$ $(5, 7)$ $(-2, -4)$ $(0, -8)$ $(-6, -2)$

